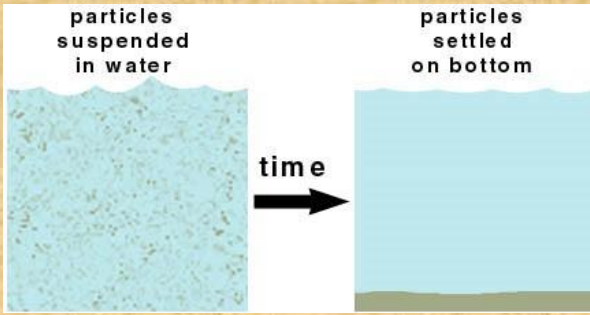



SEPARATION OF SUBSTANCES

P5: quiz

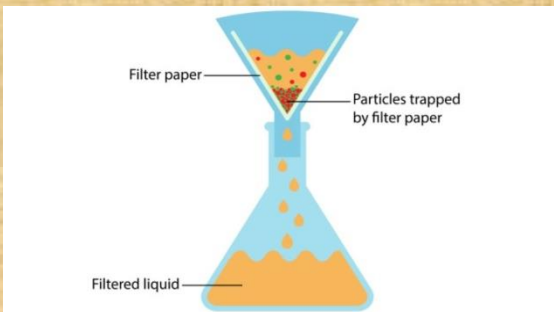
1. Identify this separation method.



- a. Sublimation
 - b. Sedimentation
 - c. Crystallization
 - d. None of the above
2. The following method is called as _____.

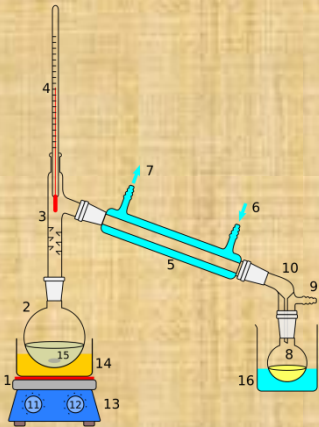


3. Identify the given method:



- a. Crystallization
- b. Filtration

- c. Distillation
d. None of the above
4. Pure water can be separated from salt water by this process. Name this method.



5. A mixture of colors can be separated by _____ technique.



ANSWERS

1. B. sedimentation
2. Decantation
3. B. filtration
4. Distillation
5. Chromatography